

name:
date:
period:

Pangaea Exercise Rubric:

Name _____

Question:

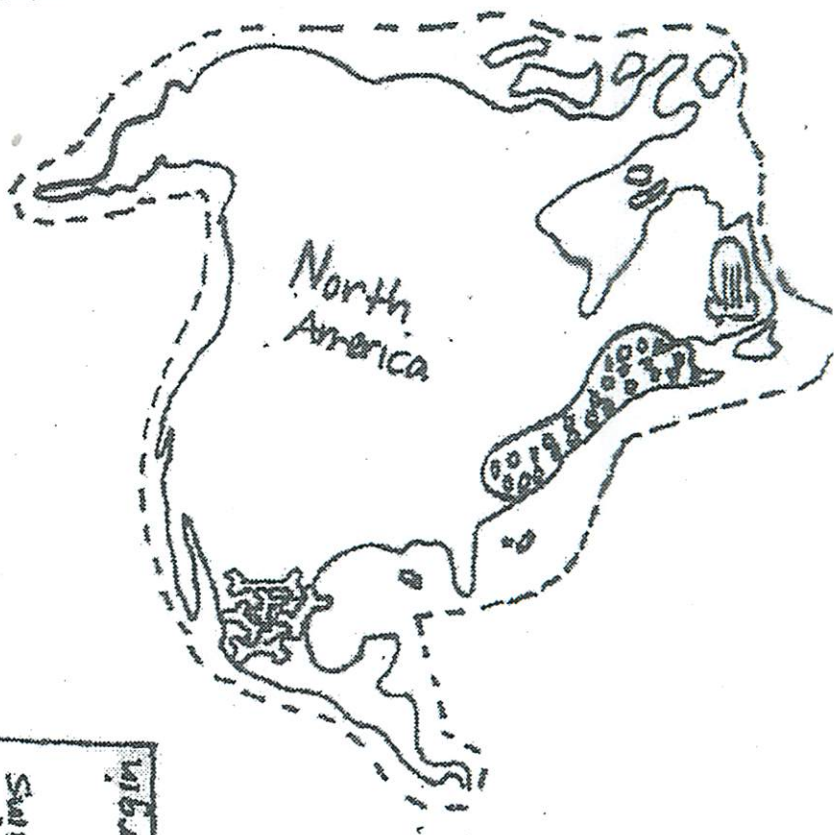
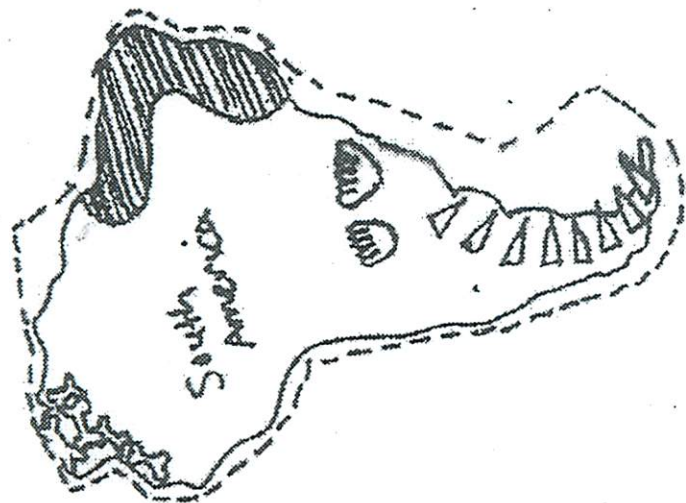
Date _____ Science _____ Period _____

What evidence is there that supports the idea that one supercontinent once existed? (list at least 2)










1. Cut out the 8 land masses on the dotted lines (throw away scraps)
2. Using page pp. 94+110 in the Science book as a reference
 - a. Arrange the 8 pieces on the construction paper into a Map of Pangaea (do not glue until all pieces fit) *Overlapping is fine!*
 - b. Fill in and glue the name plate in the upper right hand corner
 - c. Glue down the title - "Pangaea Exercise"
 - d. Glue pieces down on construction paper - Don't forget the key

50 points

3. Write a **paragraph** to answer the question, that is: neat; has complete sentences; has correct spelling, capitalization, grammar and punctuation, on notebook paper. **Include: 1. the scientist's name, 2. his hypothesis, 3. the name of his hypothesis, 4. 2 out of 3 types of his evidence, and 5. the name of his supercontinent. 50 points**
4. Glue paragraph to the back of the construction paper.
5. Glue this rubric onto the back of the paper.
6. Fill in your heading above!
7. Turn papers in to the teacher...



Pangaea Exercise

	warm water seashell
	freshwater reptile footprint
	pinecone fossil
	dinosaur fossil
	Conglomerate rock
	multicolor sandstone
	glacier grooves
	folded mountains
	continental margin